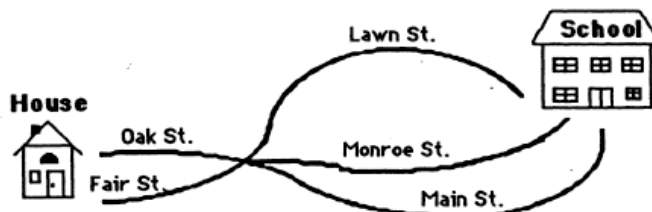


- ★★★ 1. How many different ways can Marcus get from his house to school? (HINT: Make a list, starting with Oak Street, Main Street.)



Answer: _____ ways

- ★★★ 2. Do these problems on your calculator:

a. $46 + 54 + 80 + 209 = \underline{\hspace{2cm}}$

b. $289 + 303 - 578 = \underline{\hspace{2cm}}$

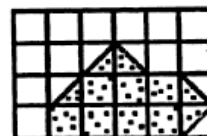
c.
$$\begin{array}{r} 375 \\ 68 \\ +396 \\ \hline \end{array} = \underline{\hspace{2cm}}$$

- ★ 3. A gerbil costs \$4.86. Charlie has 4 one-dollar bills, 1 quarter, 3 dimes, and 6 nickels. Does Charlie have enough money to buy a gerbil?

Answer: _____

- ★★★ 4. Find the area of the dotted figure.

Answer: _____ square units



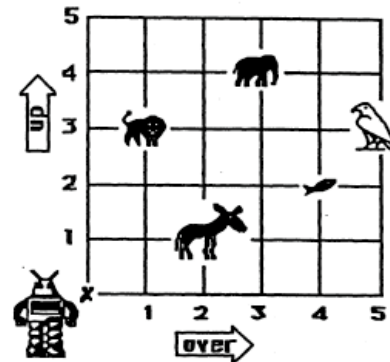
- ★ 5. Tamika found 25¢ at the beach. She also found 36¢ on a walk in the park and another 48¢ in a purse in her toy box. How much money does she have in all?

Answer : _____

- ★ 6. Write or rewrite the money value in problem 5 with a dollar (\$) sign.

Answer: _____

- ★★★ 7. Help the robot find his way at the zoo. Tell him how many steps *over*, and how many steps *up*, to find an animal. The robot always starts at X.



The first is done for you in the chart.

To find the:	Go over:	Go up:
donkey	2	1
lion		
elephant		
fish		
bird		