
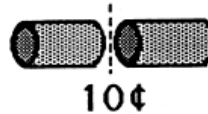
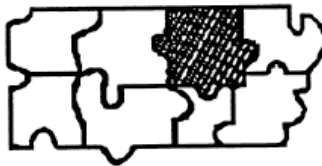


- ★★★★ 1. If it costs 10¢ to make 1 cut, how much does it cost to cut a log into 5 pieces?

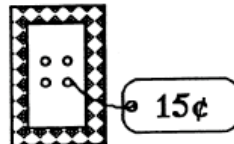

Answer: \_\_\_\_\_¢



- ★ 2. Look at the puzzle below, then circle the piece that will fit in the shaded area.



- ★★ 3. Circle the type of button that Keisha bought.  
•The button costs more than a nickel, and  
•The button costs less than a dime.



- ★ 4. Bozo chewed a hole in Lu's homework. He chewed the numbers in the ones place, and the whole answer.  
Circle the best *estimate* of the answer to the problem you can see.

- about 110
- about 60
- about 30



- ★★ 5. It takes 50 stars to make an American flag. If you laid 50 stars out in rows with 10 stars in each row, how many rows would you have?

Answer: \_\_\_\_ rows



- ★★ 6. A cat is asleep on a mat at a pet store. About how many curled-up cats can sleep on this mat, at one time?

Answer: about \_\_\_\_ cats



- ★★ 7. A kangaroo's tail is about as long as the kangaroo is tall. Draw the right size tail on this kangaroo.

